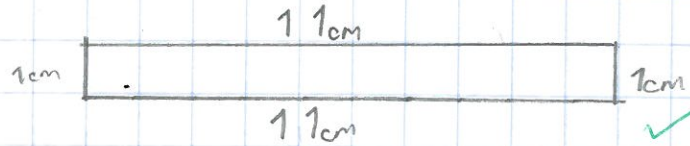


$$8 \text{ cm} \times 5 \text{ cm} + 5 \text{ cm} \times 3 \text{ cm} = 40 \text{ cm}^2 + 15 \text{ cm} = 55 \text{ cm}^2$$

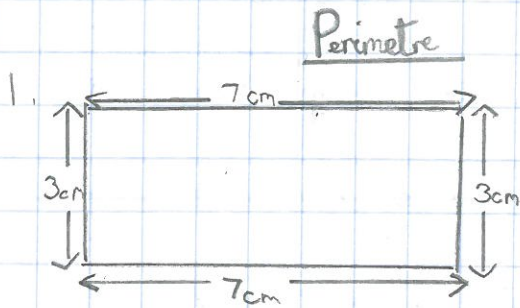
✓ Super work on area of complex shapes



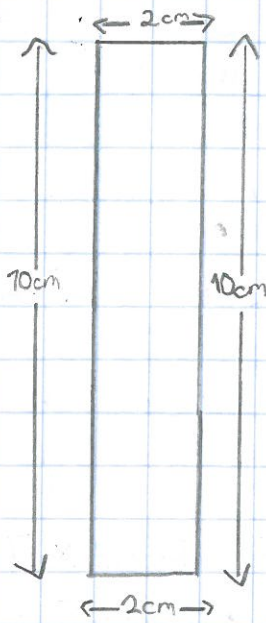
1 - 3 - 16

✓ Working out perimeter

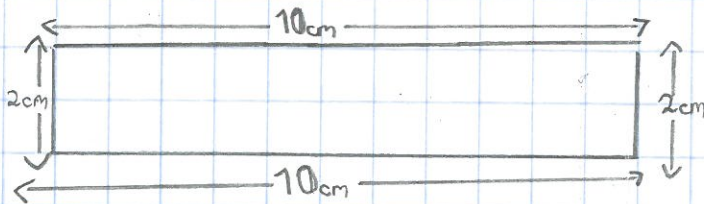
✓ making shapes with the perimeter of 24 cm



$$7 \text{ cm} + 7 \text{ cm} + 3 \text{ cm} + 3 \text{ cm} = 20 \text{ cm}$$



$$2 \text{ cm} + 2 \text{ cm} + 10 \text{ cm} + 10 \text{ cm} = 24 \text{ cm}$$



$$10 \text{ cm} + 10 \text{ cm} + 2 \text{ cm} + 2 \text{ cm} = 24 \text{ cm}$$